

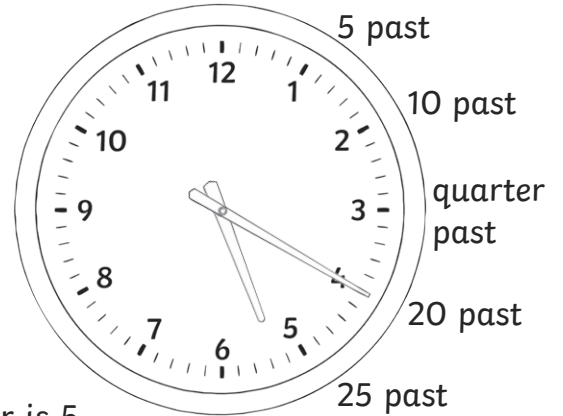



# Five-Minute Digital Times

I can tell the time in 5-minute intervals using a digital clock.




## Past the Hour Times








On these clocks, the hour is 5.  
20 minutes have passed since the hour.  
The time is 20 past 5.

1) Write the time in words under the digital clocks. The first one has been done for you.



*20 past 10*

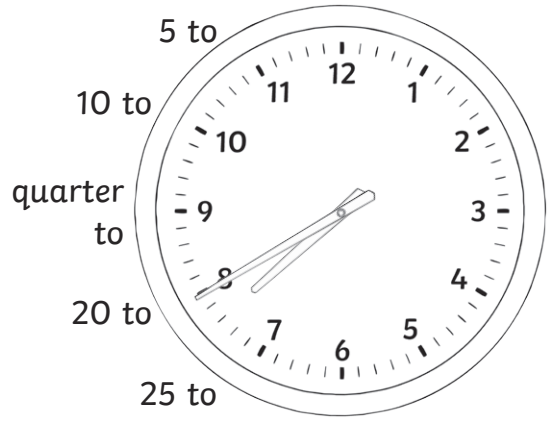




# To the Hour Times

The numbers before the colon show the hour.

The numbers after the colon show the minutes.



On these clocks, the hour is 7.

40 minutes have passed since the hour.

Once the time has gone past 30, we say how many minutes are left to the next hour.

The time is 20 minutes to 8, or 20 to 8.

2) Write the time in words under the digital clocks.

a)

---

b)

---

c)

---

d)

---

e)

---

f)

---







# To and Past the Hour Times

3) Write the time in words under the digital clocks.


a)




b)




c)




d)



e)



f)





# Five-Minute Digital Times **Answers**

Question	Answer
<b>1. Write the time in words under the digital clocks.</b>	
a.	<i>20 past 10</i>
b.	<i>25 past 7</i>
c.	<i>quarter past 9</i>
d.	<i>5 past 6</i>
e.	<i>10 past 4</i>
f.	<i>20 past 11</i>
<b>2. Write the time in words under the digital clocks.</b>	
a.	<i>20 to 11</i>
b.	<i>10 to 7</i>
c.	<i>5 to 10</i>
d.	<i>25 to 7</i>
e.	<i>10 to 5</i>
f.	<i>20 to 9</i>
<b>3. Write the time in words under the digital clocks.</b>	
a.	<i>5 past 7</i>
b.	<i>10 to 10</i>
c.	<i>20 past 1</i>

Question	Answer
d.	<i>25 to 12</i>
e.	<i>25 past 1</i>
f.	<i>5 to 9</i>

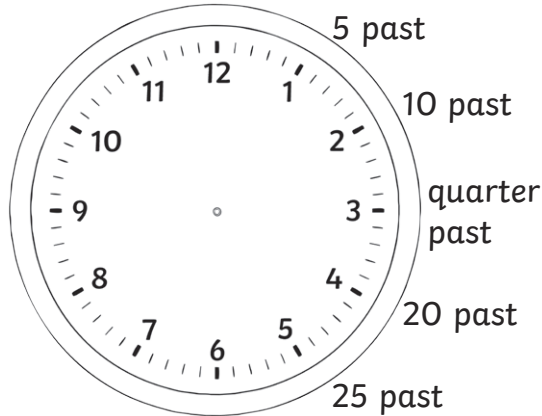


# Five-Minute Digital Times




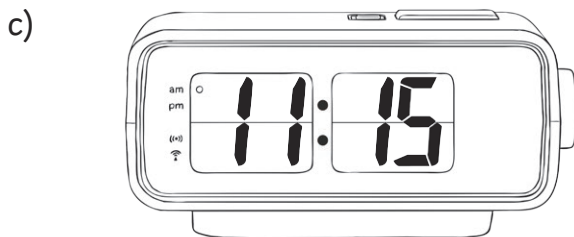


I can tell the time in 5-minute intervals using a digital clock.



## Past the Hour Times

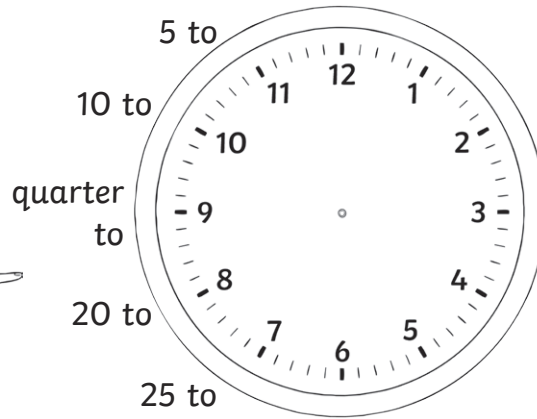


1) Write the time in words under the digital clocks. The first one has been done for you.










# To the Hour Times





2) Write the time in words under the digital clocks.







3) Draw hands on the analogue clock so it shows the same time as the digital clock.



a)





b)




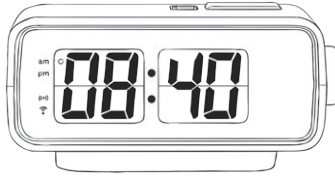
c)





d)





e)





f)



g)











h)





# Five-Minute Digital Times **Answers**

Question	Answer
<b>1. Write the time in words under the digital clocks.</b>	
a.	<i>20 past 11</i>
b.	<i>25 past 6</i>
c.	<i>quarter past 11</i>
d.	<i>5 past 12</i>
e.	<i>10 past 8</i>
f.	<i>20 past 7</i>
<b>2. Write the time in words under the digital clocks.</b>	
a.	<i>20 to 10</i>
b.	<i>10 to 9</i>
c.	<i>25 to 10</i>
d.	<i>5 to 7</i>
e.	<i>20 to 11</i>
f.	<i>5 to 12</i>

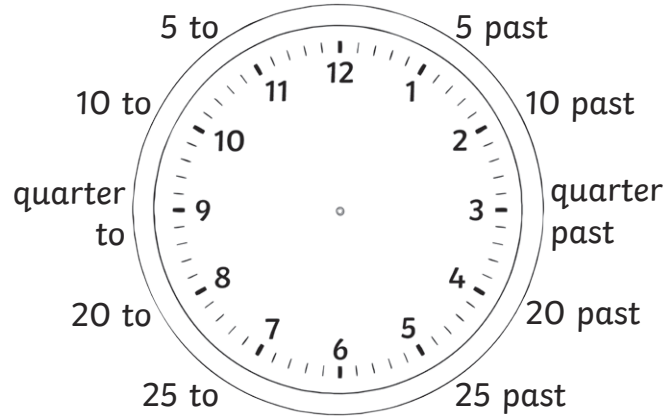
Question	Answer
<b>3. Draw hands on the analogue clock so it shows the same time as the digital clock.</b>	
a.	 20 past 4
b.	 25 past 8
c.	 5 past 9
d.	 10 past 11
e.	 20 to 9
f.	 10 to 7
g.	 5 to 8
h.	 25 to 11










# Five-Minute Digital Times

I can tell the time in 5-minute intervals using a digital clock.




1) Write the time in words under the digital clocks.






g)




h)




i)




j)



k)




l)




3) Draw hands on the clock to show these digital times, and write the time in words underneath.





a)



b)





c)









d)





e)





f)



g)



h)





Here is a letter Gian wrote to a friend, explaining what he did on a day in the holidays. He wrote the times in numbers and words.

Hi Lee,

On Monday, I got up at *10 past 9* and had my breakfast. I watched TV until *10 to 10* and then I got ready to go out.



We caught the bus into town at *25 past 10* and we got off near the library at *25 to 11*. The first shop we went to was a gaming shop. I was there until *20 past 11*. We wandered in and out of lots of shops and at *5 past 12*, we went to have something to eat. At *5 to 1*, we hit the shops again, catching the bus back home at *quarter past 3*. As soon as I got home, I went to my room and played on my new game until we had our tea at *20 to 6*. I spent the evening watching TV. At *10 to 9*, my mum told me to get ready for bed and I finally went to sleep at *25 to 10*.

What did you get up to?

Gian

3) Rewrite the letter, converting the analogue times into digital times.

Hi Lee,

On Monday, I got up at \_\_\_\_\_

and had my breakfast. I watched TV until \_\_\_\_\_ and then I got ready to go out.

We caught the bus into town at \_\_\_\_\_ and we got off near the library at \_\_\_\_\_. The first shop we went to was a gaming shop. I was there until \_\_\_\_\_. We wandered in and out of lots of shops and at \_\_\_\_\_, we went to have something to eat. At \_\_\_\_\_, we hit the shops again, catching the bus back home at \_\_\_\_\_. As soon as I got home, I went to my room and played on my new game until we had our tea at \_\_\_\_\_. I spent the evening watching TV. At \_\_\_\_\_, my mum told me to get ready for bed and I finally went to sleep at \_\_\_\_\_.









What did you get up to?

Gian



# Five-Minute Digital Times **Answers**

Question	Answer
<b>1. Write the time in words under the digital clocks.</b>	
a.	<i>20 past 11</i>
b.	<i>5 to 7</i>
c.	<i>25 to 8</i>
d.	<i>10 past 12</i>
e.	<i>10 to 9</i>
f.	<i>25 past 3</i>
g.	<i>5 past 9</i>
h.	<i>20 to 7</i>
i.	<i>10 to 1</i>
j.	<i>5 to 9</i>
k.	<i>5 past 6</i>
l.	<i>5 to 10</i>

Question	Answer
<b>2. Draw hands on the analogue clock so it shows the same time as the digital clock.</b>	
a.	 <i>20 past 4</i>
b.	 <i>25 past 8</i>
c.	 <i>5 past 8</i>
d.	 <i>10 past 11</i>
e.	 <i>20 to 9</i>
f.	 <i>10 to 7</i>
g.	 <i>5 to 12</i>
h.	 <i>25 to 10</i>



# Five-Minute Digital Times Answers

Question	Answer
<b>3. Rewrite the letter, converting the analogue times into digital times.</b>	
<p>Hi Lee,</p> <p>On Monday, I got up at <b>9:10</b> and had my breakfast. I watched TV until <b>9:50</b> and then I got ready to go out.</p> <p>We caught the bus into town at <b>10:25</b> and we got off near the library at <b>10:35</b>. The first shop we went to was a gaming shop. I was there until <b>11:20</b>. We wandered in and out of lots of shops and at <b>12:05</b>, we went to have something to eat. At <b>12:55</b>, we hit the shops again, catching the bus back home at <b>3:15</b>. As soon as I got home, I went to my room and played on my new game until we had our tea at <b>5:40</b>. I spent the evening watching TV. At <b>8:50</b>, my mum told me to get ready for bed and I finally went to sleep at <b>9:35</b>.</p> <p>What did you get up to?</p> <p>Gian</p>	